

COASTAL UPWELLING - MONTEREY BAY CALIFORNIA

INTRODUCTION

Coastal upwelling is the upward movement of water along a coast. This rising water is usually cooler and more nutrient rich than the surface water it replaces.

The upwelling of nutrient rich water has made Monterey Bay, on the central coast of California, a favorite with fishermen. This information is presented in a form that provides students with a clear picture of upwelling concepts.

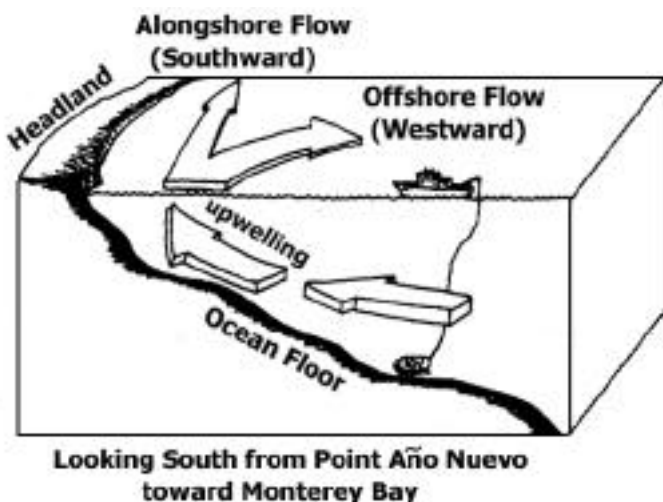
Northwest winds: The strongest upwelling occurs when the Monterey area is experiencing winds from the northwest which blow parallel to the coast of California. When these winds are weak or the winds are from the south, the upwelling tends to stop and the warmer waters of the California current move into Monterey Bay. The very large California Current travels southward along the California coast from the North Pacific.

Headlands: Observations of sea surface temperature from satellites show that upwelling is not uniform along the central California coast, but is strongest at the major headlands. The cold water of Monterey Bay comes primarily from the upwelling in the Point Año Nuevo area, and then progresses south across the mouth of Monterey Bay toward the Monterey Peninsula.

Coriolis effect: In the northern hemisphere the rotation of Earth causes surface water to move to the right of the wind. This movement to the right is known as the Coriolis effect. In the Monterey area, winds out of the northwest cause water to flow to the southwest, away from the coast. The water flowing offshore is replaced by the cool, nutrient rich water which rises up into the coastal area from below, resulting in the upwelling phenomena.




Monterey (Study Area)



The water flowing offshore is replaced by the cool, nutrient rich water which rises up into the coastal area from below, resulting in the upwelling phenomena.

Bifurcated flow: When cool upwelling water rises to the surface at the headlands it departs in two directions, one tending offshore (to the west) and the other toward the equator (south). The upwelled water that flows westward, away from the coast, is immediately influenced by the Coriolis effect. The portion of the upwelled water that is traveling south is influenced by the Coriolis effect, the geography of the coastline, winds from the northwest and the California current.

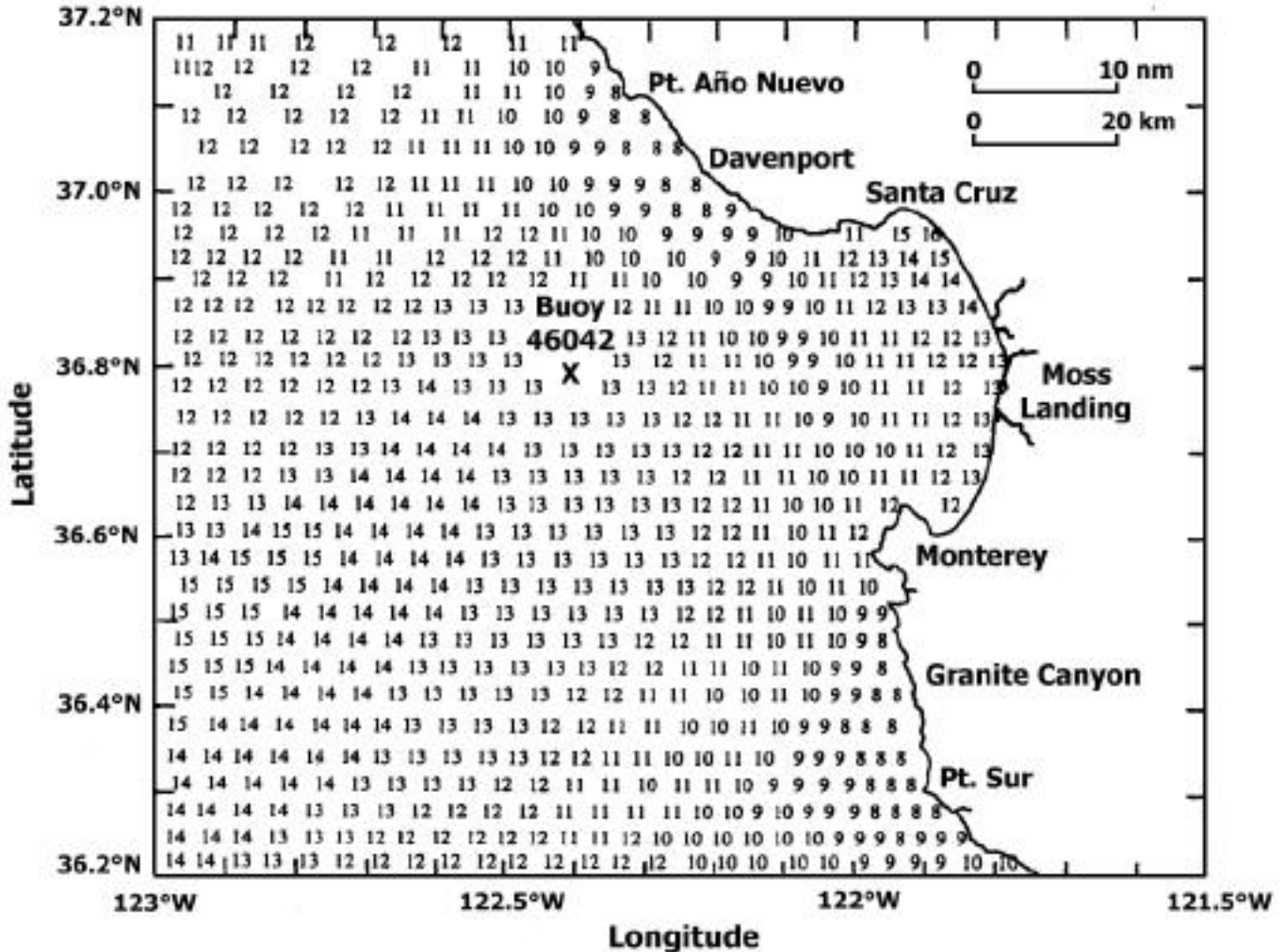



Visit to an Ocean Planet



The upwelling water can be tracked by measuring its cool temperature, high nutrient content, high salinity and high density. The nutrients brought to the surface encourage the high plankton productivity of the Monterey Bay area which is why it is an excellent fishing locality.

Sea Surface Temperatures (°C) on June 18, 1989





PART II. GRAPHING

Plot both sea surface temperature and wind speed with time. Using the sea surface temperatures at Granite Canyon near Monterey and the wind speed and direction information from buoy 46042 in Monterey Bay, plot the following data on the graph provided.


Graphing Notes:

1. Notice that the scales for plotting temperature and wind speed are on opposite sides of the graph.
2. Wind direction is the direction the wind is blowing from.
3. Be especially careful when plotting the southerly winds.
4. Negative numbers on the table indicate winds from the south.
5. Use ink when plotting temperature and pencil when plotting wind speed.
6. Use different marks for your plots of temperature (X) and wind speed (O). Then connect each set of marks (all the X's in ink and all of the O's in pencil) to make two lines on the graph.

PART III. AN ANALYSIS OF UPWELLING USING YOUR MAP AND GRAPH.

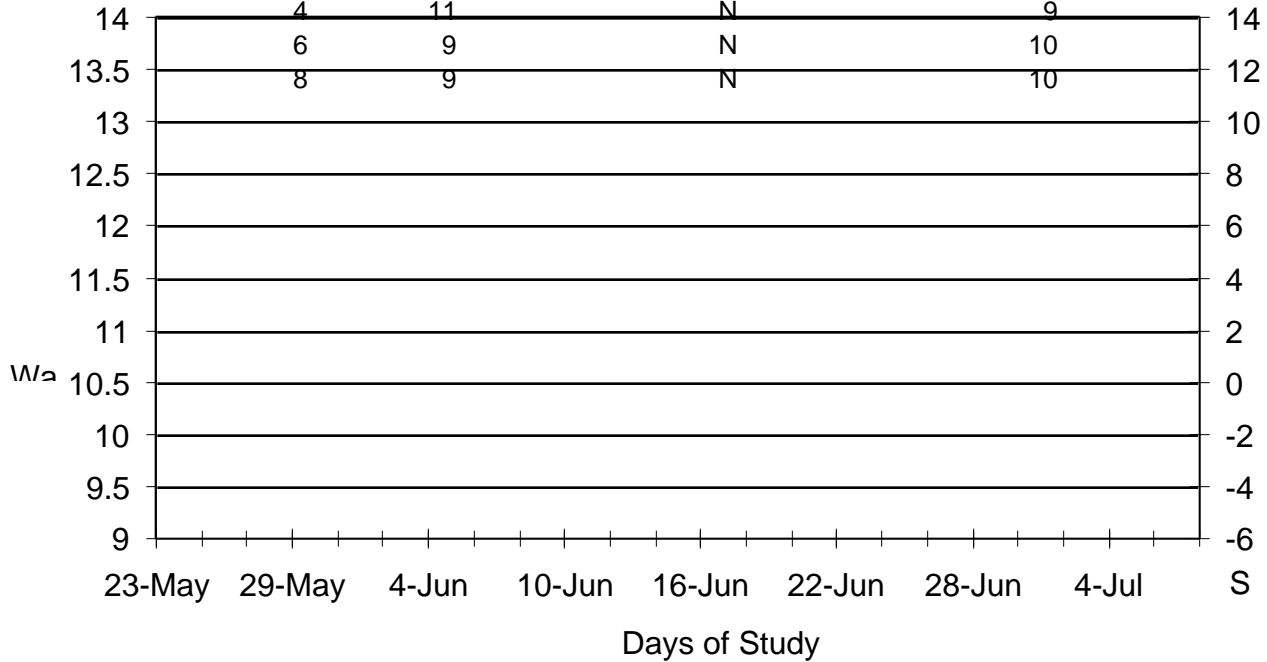
Answer these questions using your map of the sea surface temperatures of the Monterey Bay area and your graph of water temperature and winds.


1. Referring to your graph:
 - a. Describe the wind direction and speed during the periods of coldest water (maximum upwelling).
 - b. Describe the wind direction and speed during the periods of warmest water (minimum upwelling).
2. Referring to your map:
 - a. Describe the location and shape of the area of cold surface water (9° - 11°) off of Point Año Nuevo.
 - b. Explain why some of the cold upwelled water moves westward.
 - c. Explain why some of the cold upwelled water moves south across the bay toward Monterey.
3. Why do you think the cold upwelled water is concentrated at the Point Año Nuevo and Point Sur locations?
4. Why is the Santa Cruz beach area so much warmer than the rest of the bay?
5. Besides following water temperature, what other measurable items could you use to follow the two paths of the upwelling water?
6. Get together with two other students (_____ & _____) and have each person explain upwelling to the two others. After all three of you have explained the idea twice, take a couple of minutes and write an explanation for upwelling that a 10 year old could read and understand.
7. Fishing
Sardines. John Steinbeck wrote about the sardine canneries in Monterey in his book *Cannery Row*. The book describes the fishermen that netted these small plankton-eating fish by the hundreds of tons yearly until they were almost fished out. If they were still plentiful, how would wind direction influence your choice of days to take your boat and crew out sardine fishing? (Take into account the growth rate of plankton.)



Sea Surface Temperature & Wind

Date (1989)	Sea Surface		Wind	
	Temperature (°C)	Direction	Speed (m/sec)	
May 23	10	N	3	
25	10	N	8	
27	9	N	10	
29	9	N	8	
31	9	N	4	
June 2	10	S	-1	
4	12	S	-4	
6	13	S	-3	
8	12	N	7	
10	11	N	5	
12	10	N	8	
14	10	N	7	
16	10	N	7	
18	9	N	9	
20	9	N	11	
22	11	N	4	
24	12	S	-4	
26	13	S	-6	
28	13	-	0	
30	14	S	-1	
July 2	13	N	6	N
4	11	N	9	





Squid are netted as they swarm in southern Monterey Bay to reproduce. Fishermen turn on bright lights to attract and net them from midnight to six a.m. The squid prefer the water that is warmer than average. Based on your data which nights in June 1989 would you have picked to go squid fishing?

8. Tour boat operator

a. Suppose you were offering bay tours to the public and wanted your patrons to see the large, plankton-eating basking sharks that visit Monterey Bay. What area would be optimal for spotting these sharks close to Moss Landing?

Lat. _____°__ & Long. _____°__ Why?

b. During the summer, there is often a small pod (group) of plankton-eating blue whales south of Monterey. What area would be optimal for whale watching trips departing from Monterey?

Lat. _____°__ & Long. _____°__ Why?

9. MBARI

The Monterey Bay Aquarium Research Institute (MBARI) has a new remotely operated vehicle (ROV) that can go down into the Monterey Submarine Canyon to a depth of 4,000 meters.

During most of the trip down to the bottom the video shows “marine snow” (tiny particles of decaying organisms, feces, and plankton) gently drifting to the bottom. Some of this material will be recycled by upwelling. If you sent MBARI’s ROV down at 37.0° N, 122.5° W, during which days in June 1989 would you have expected maximum marine snow? Why? Remember to consider what the marine snow is composed of, that it drifts down slowly and the growth rate of plankton.

10. Power Plant at Moss Landing

a. There is a large gas burning electrical power plant at Moss Landing that releases warm water, used for cooling its turbines, into Monterey Bay. Does this warm water show up on the satellite map? Why?

b. Would you expect to find this warm water near the surface or on the bottom? Why?

Steve Clark, Monterey Academy of Oceanographic Science (MAOS)

This activity is based on information that was compiled and evaluated by Leslie Rosenfeld and her colleagues from Monterey Bay Aquarium Research Institute (MBARI) in Moss Landing, CA.

Reference:

Bifurcated flow from an upwelling center: a cold water source for Monterey Bay, Rosenfeld et al., *Continental Shelf Research* Vol. 14, No. 9.

Reviewed By:

High School Classroom Teachers: John Whisler, Dale Kerrigan & Tom Dooner,
Oceanographers: Tom Murphree (Naval Postgraduate School), Judith Connor (MBARI) & Leslie Rosenfeld (Naval Postgraduate School).

SOURCE

Monterey Academy of Oceanographic Science.